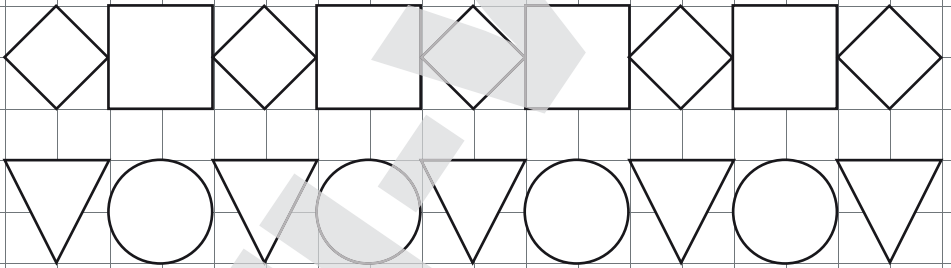
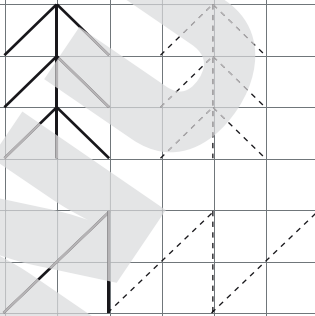



VÄRVI ÜHESUGUSED KUJUNDID ÜHTE VÄRVI.



JÄTKA HARJUTUST.


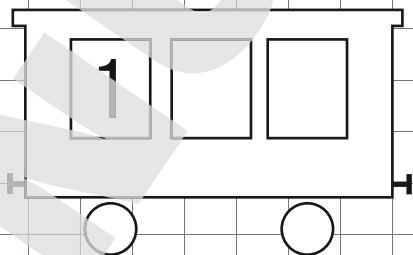

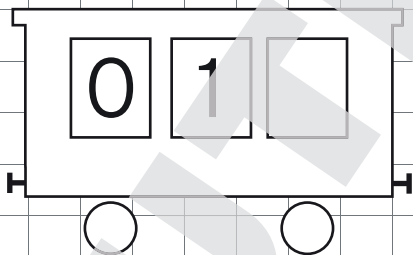


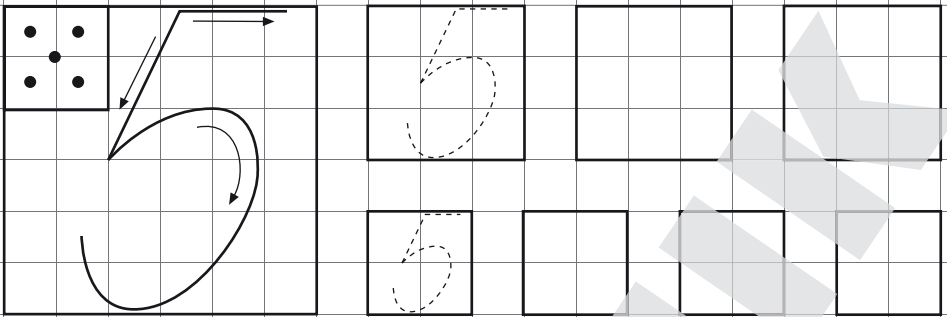


VÄRVI IGA KOLMAS RING.

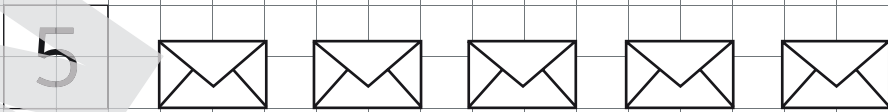
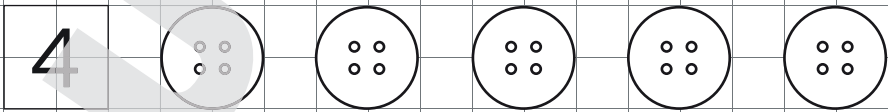
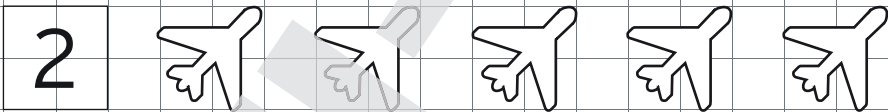


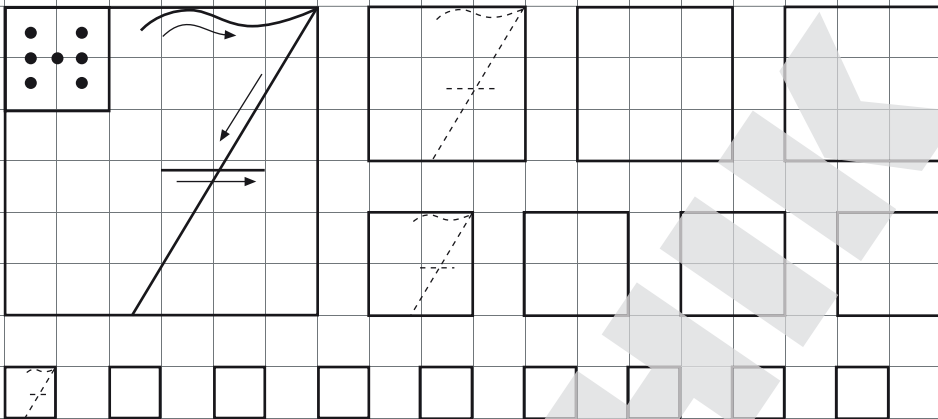
KIRJUTA VAGUNI AKNASSE EELNEV  
VÕI JÄRGNEV ARV.








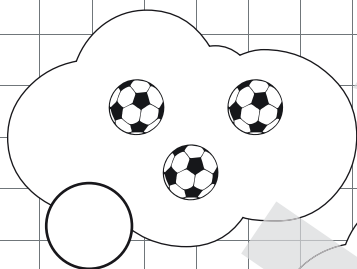


VÄRVI NÕUTAV ARV.

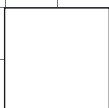
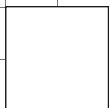
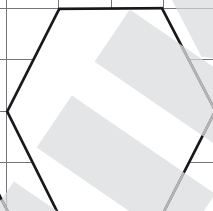
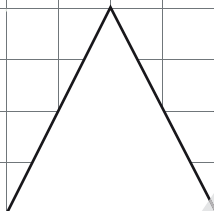
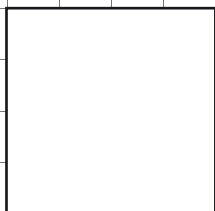
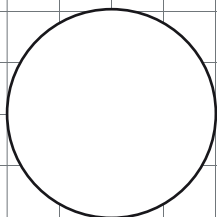




LOENDA IGAS PILVEKESES OLEVAD ESEMED  
JA KIRJUTA SAADUD ARV RINGI SISSE.

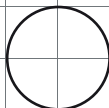


KIRJUTA KASTIKESSE, MITU NURKA ON KUJUNDIL.



JOONISTA JUURDE NÕUTAV ARV KUJUNDEID.

4



5



6


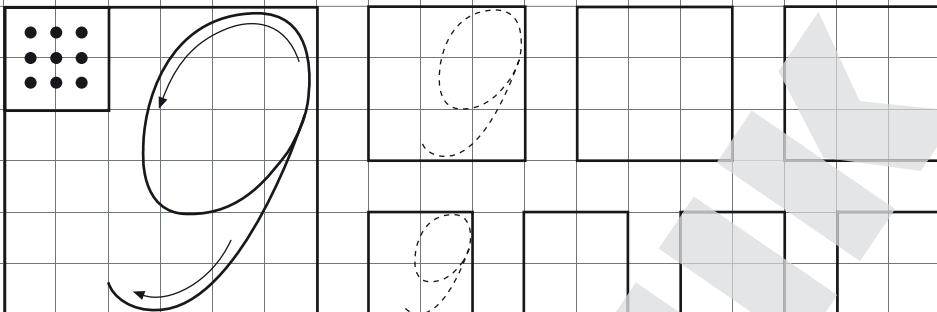


7



8





KIRJUTA PUUDUVAD ARVUD.

1		3		5	6		8	
	2		4			7		9
1	2				6			

VÖRDLE JA KIRJUTA ÕIGE MÄRK (>, <, =).

$5 < 8$

$5 > 2$

$7 = 7$

$4 \bigcirc 3$

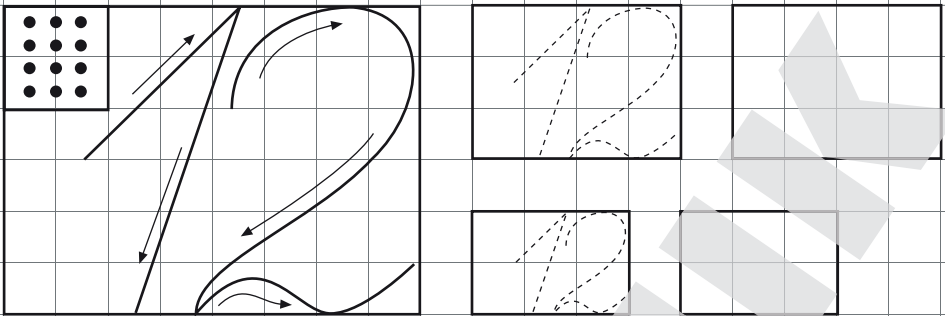
$6 \bigcirc 6$

$1 \bigcirc 2$

$7 \bigcirc 4$

$8 \bigcirc 3$

$2 \bigcirc 3$



ARVUTA KUJUNDITE ABIL.

2+3	<input type="checkbox"/> <input type="checkbox"/> <input type="checkbox"/> <input type="checkbox"/> <input type="checkbox"/>	5
-----	--	---


2+4		
-----	--	--

4+1		
-----	--	--

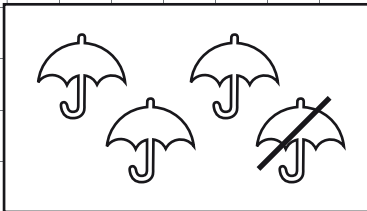
3+3		
-----	--	--

2+2		
-----	--	--

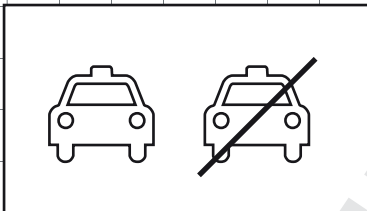
ARVUTA.




$$5 - 2 = \dots$$




$$4 - 1 = \dots$$



$$2 - \dots = 1$$



$$5 - \dots = 2$$



$$\dots - \dots = \dots$$



LIIDA JA LAHUTA.

$2 + 1 = \square$

$2 - 1 = \square$

$2 + 2 = \square$

$3 - 2 = \square$

$3 + 2 = \square$

$4 - 2 = \square$

$4 + 1 = \square$

$5 - 1 = \square$

$5 + 0 = \square$

$5 - 5 = \square$

$1 + 3 = \square$

$5 - 2 = \square$

KIRJUTA ÕIGE MÄRK : + VÕI -

$2 \square 3 = 5$

$4 \square 2 = 2$

$5 \square 3 = 2$

$1 \square 3 = 4$

$4 \square 1 = 5$

$4 \square 1 = 3$

$5 \square 4 = 1$

$3 \square 0 = 3$

$2 \square 2 = 4$

$5 \square 5 = 0$